



FIRAYALAL PUBLIC SCHOOL

SUMMER ASSIGNMENT



Stay cool, stay happy, it's
summer time!



EAT | STUDY | ENJOY



NAME- _____

CLASS- _____

SESSION- _____





NOUNS



A noun is a naming word. It names a person, place, animal or thing.

A. Sort the nouns and write them in the correct column.

teacher, school, dog, book, Mumbai, girl, elephant, park,
pencil, hospital, cat, table, India, boy, bird, bag

PERSON



1. _____
2. _____
3. _____
4. _____

PLACE



1. _____
2. _____
3. _____
4. _____

ANIMAL



1. _____
2. _____
3. _____
4. _____

THING



1. _____
2. _____
3. _____
4. _____

B. Underline the nouns in the following sentences.

1. The teacher is helping the students.
2. My dog is playing in the park.
3. I have a new school bag.
4. We went to Mumbai last summer.
5. The bird is sitting on the tree.



C. Write any 5 nouns of your own.

1. _____
2. _____
3. _____
4. _____
5. _____

Circle The Common Noun
And Underline The Proper

- 1) Chennai is a big city.
- 2) Ganga river is in India.
- 3) My brother ram, is a doctor.
- 4) Miss Ruby is my teacher.
- 5) Adi is her cousin.
- 6) Aladdin had a magic lamp.
- 7) Rajiv and Priyanka are brother and sister.

PLURAL NOUNS

Write the plural words. Add "s" or "es".

1. plate

2. apple

3. dress

4. cat

5. box

6. book

7. dish

8. class

9. dog

10. egg

11. watch

12. spoon

13. glass

14. fox

15. frog

16. cup

17. potato

18. bus

19. desk

20. flower

21. kiss

22. bag

23. switch

24. mask

25. ring

26. circle

27. chair

28. lunch

29. tax

30. beach

EXERCISE 5.1 FEMININE

Fill in the feminine gender of these words. Choose from the words in the box.

sister	lioness	aunt	woman	queen
daughter	lady	princess	Mrs.	mother
mama	granddaughter	duck	she	hen
witch	madam	cow	waitress	peahen

Masculine	Feminine	Masculine	Feminine
brother		lion	
father		man	
king		uncle	
prince		son	
Mr.		gentleman	
papa		drake	
peacock		waiter	
grandson		rooster	
bull		he	
sir		wizard	

The Hungry Cat

Once upon a time, there was a hungry cat named Whiskers. Whiskers lived in a cozy little house by the park. One sunny day, Whiskers woke up feeling very hungry. He decided to go on an adventure to find some food.



Answer the Questions:

1. Whiskers was a _____ cat.
2. Where did Whiskers live?
 - a) In a tree
 - b) In a cozy little house
 - c) In the park
3. What did Whiskers wake up feeling?
 - a) Happy
 - b) Hungry
 - c) Tired
4. Whiskers decided to go on an adventure to find some _____.
5. What kind of day was it when Whiskers woke up?
 - a) Rainy
 - b) Sunny
 - c) Windy
6. Whiskers wanted to find food because he was _____.
7. Where did Whiskers want to go to find food?
 - a) To the beach
 - b) To the jungle
 - c) On an adventure
8. Whiskers' house was by the _____.

The Friendly Bee

Once upon a time, there was a friendly bee named Buzz. Buzz lived in a colorful garden filled with flowers of all shapes and sizes. Buzz loved to fly from flower to flower, collecting sweet nectar to make delicious honey.



Answer the Questions:

1. What is the name of the friendly bee in the story?
a) Buzz b) Bumble c) Flutter
2. Where did Buzz live?
a) In a tree b) In a colourful garden with flowers c) In a cave
3. What did Buzz like to collect from flowers?
a) Seeds b) Nectar c) Leaves
4. What did Buzz use the nectar for?
a) To make honey
b) To water the plants
c) To paint the flowers
5. The garden was filled with colorful _____.
6. What kind of bee was Buzz?
a) friendly
b) angry
c) lazy

नाम _____

"हाथी राजा"

कविता

हाथी राजा, बड़ा है बलवान,
जंगल में है उसकी शान।
सूँड से पानी, फेंके ऊपर को,
बच्चे हँसते हैं, देख कर उसको।



प्रश्न - उत्तर

प्रश्न १. कविता में किसे राजा कहा गया है?

उत्तर - _____

प्रश्न २. हाथी की शान कहाँ है?

उत्तर - _____

प्रश्न ३. हाथी अपनी सूँड से क्या करता है?

उत्तर - _____

प्रश्न ४. बच्चे हाथी को देखकर क्या करते हैं?

उत्तर - _____



विलोम (विपरीत) शब्द

1. विपरीत शब्द लिखो।

- छोटा X _____
- दूर X _____
- नरम X _____
- सीधा X _____
- इधर X _____
- रात X _____
- सुबह X _____

2. विपरीत शब्द पर गोला लगाओ

- रात - सुबह शाम दिन कल
- नरम - गरम शर्म ठंडा धुप
- छोटा - बड़ा खोटा मोटा सीधा
- ठंडा - गरम नरम पीला गोरा
- मोटा - छोटा पतला हल्का भारी

दिनों के नाम सहीक्रम में लगाइए -

शुक्रवार

सोमवार

रविवार

मंगलवार

गुरुवार

शनिवार

बुधवार

1. _____ 2. _____ 3. _____ 4. _____
5. _____ 6. _____ 7. _____

खाली स्थान भरों -

सात , शुक्रवार , रविवार , शनिवार , मंगलवार

- शनिवार के बाद _____ आता है।
- सोमवार और बुधवार के बीच में _____ आता है।
- गुरुवार के बाद _____ आता है।
- सप्ताह में कुल _____ दिन होते हैं।
- शुक्रवार और रविवार के बीच में _____ आता है।

2 स्वर और व्यंजन को छोट कर अलग करो और उन्हें कम से लगाओ:-



स्वर : _____

व्यंजन : _____



BRAIN DRILL - 1

Date/...../.....

SCORE

1. Write the following in the numerals.

a. Seven hundred ninety-four

b. Four hundred eighteen

c. Five hundred eighty-nine

d. Six hundred seventy-two

e. Five hundred eighty-seven

f. Nine hundred ninety-six

g. Eight hundred eighty-one

2. Write the number names of the following.

a. 695

b. 888

c. 283

d. 869

e. 568

f. 357

g. 804

h. 235




DIRECTIONS: FOLLOWING THE EXAMPLE, WRITE THE EXPANDED FORM OF THE FOLLOWING NUMBERS.

345	$300 + 40 + 5$
137	
246	
791	
582	
414	
653	
829	
968	



NAME _____ DATE _____

COMPARING NUMBERS



505	<input type="checkbox"/>	252		232	<input type="checkbox"/>	562
956	<input type="checkbox"/>	945		257	<input type="checkbox"/>	128
445	<input type="checkbox"/>	465		655	<input type="checkbox"/>	655
420	<input type="checkbox"/>	955		412	<input type="checkbox"/>	532
112	<input type="checkbox"/>	125		843	<input type="checkbox"/>	410
330	<input type="checkbox"/>	332		426	<input type="checkbox"/>	654
156	<input type="checkbox"/>	425		735	<input type="checkbox"/>	903

A) Write each set of numbers in order from least to greatest.

1) 216 532 162 308 478

2) 723 415 328 103 689

3) 474 447 620 552 125

4) 815 964 528 582 631

5) 109 236 414 326 441

B) Write each set of numbers in order from greatest to least.

1) 582 829 758 917 719

2) 617 547 671 218 182

3) 760 359 268 633 395

4) 236 523 645 832 178

5) 540 916 729 448 484

Fill In The Blanks

A) The place value of 7 in 751

B) The place value of 5 in 551

C) The place value of 4 in 741

D) The place value of 6 in 961

E) The place value of 2 in 321

F) The place value of 6 in 621

G) The place value of 8 in 481

H) The place value of 6 in 161

Name: _____ Date: _____

Numbers in Expanded Form

A. Write the expanded form of each number.

1. 248 = _____ + _____ + _____

2. 121 = _____ + _____ + _____

3. 952 = _____ + _____ + _____

4. 327 = _____ + _____ + _____

5. 635 = _____ + _____ + _____

6. 473 = _____ + _____ + _____

7. 595 = _____ + _____ + _____

8. 902 = _____ + _____ + _____

9. 764 = _____ + _____ + _____

10. 819 = _____ + _____ + _____

Numbers before and after to 1000

	287	
--	-----	--

540		542
-----	--	-----

755		757
-----	--	-----

	5	
--	---	--

	379	
--	-----	--

424		426
-----	--	-----

514		516
-----	--	-----

	373	
--	-----	--

	894	
--	-----	--

336		338
-----	--	-----

216		218
-----	--	-----

	126	
--	-----	--

	980	
--	-----	--

303		305
-----	--	-----

581		583
-----	--	-----

	608	
--	-----	--

	196	
--	-----	--

857		859
-----	--	-----

Name _____

Two-Digit Subtraction

without Regrouping



$$\begin{array}{r} 30 \\ - 20 \\ \hline \\ \hline \end{array}$$

$$\begin{array}{r} 84 \\ - 34 \\ \hline \\ \hline \end{array}$$

$$\begin{array}{r} 87 \\ - 72 \\ \hline \\ \hline \end{array}$$

$$\begin{array}{r} 79 \\ - 55 \\ \hline \\ \hline \end{array}$$

$$\begin{array}{r} 28 \\ - 13 \\ \hline \\ \hline \end{array}$$

$$\begin{array}{r} 57 \\ - 52 \\ \hline \\ \hline \end{array}$$

$$\begin{array}{r} 42 \\ - 21 \\ \hline \\ \hline \end{array}$$

$$\begin{array}{r} 33 \\ - 12 \\ \hline \\ \hline \end{array}$$

$$\begin{array}{r} 75 \\ - 34 \\ \hline \\ \hline \end{array}$$

$$\begin{array}{r} 25 \\ - 12 \\ \hline \\ \hline \end{array}$$

$$\begin{array}{r} 68 \\ - 34 \\ \hline \\ \hline \end{array}$$

$$\begin{array}{r} 67 \\ - 47 \\ \hline \\ \hline \end{array}$$

$$\begin{array}{r} 96 \\ - 03 \\ \hline \\ \hline \end{array}$$

$$\begin{array}{r} 74 \\ - 22 \\ \hline \\ \hline \end{array}$$

$$\begin{array}{r} 44 \\ - 32 \\ \hline \\ \hline \end{array}$$

$$\begin{array}{r} 56 \\ - 15 \\ \hline \\ \hline \end{array}$$

2 Digits Addition

14	28	22	31	79
+22	+60	+71	+16	+10
<input type="text"/>	<input type="text"/>	<input type="text"/>	<input type="text"/>	<input type="text"/>



14	12	21	65	52
+25	+14	+13	+22	+36
<input type="text"/>	<input type="text"/>	<input type="text"/>	<input type="text"/>	<input type="text"/>

51	16	02	74	34
+38	+20	+40	+11	+30
<input type="text"/>	<input type="text"/>	<input type="text"/>	<input type="text"/>	<input type="text"/>

13	36	45	21	45
+14	+22	+23	+50	+13
<input type="text"/>	<input type="text"/>	<input type="text"/>	<input type="text"/>	<input type="text"/>

Odd and Even Numbers Activity

Identify the odd and even line. Fill in the missing numbers:

	1	3			9			15		19
	2	4		8		12			18	

Circle the odd numbers

5 6 8 9
 2 7 4
 11 10 **3** 13
 12 14 15
 1 16 19 18
 20 17 22
 29 23 22 28

Circle the even numbers

2 13 5 11
 14 17 **6**
 21 16 15 19
 22 37 10
 23 28 64 78
 51 68 47
 28 35 70 69

Write odd or even number.

11 Odd 14 _____ 17 _____ 13 _____ 19 _____

18 _____ 36 _____ 52 _____ 24 _____ 65 _____

Note :

1. ह दि ि निबिध “मेरा देश” याद करें और A4 शीट पेपर पर लिखें।
2. Learn Synonyms and Antonyms of page no. 85 and 87 from English Grammar Book.
3. EVS Holiday Homework:-
 - a. Past 5 internal organs and 5 external organs in A4 size sheet
 - b. Write two points on each external and internal organs.